

Write your name here

Surname

Other names

Centre Number

Candidate Number

Edexcel GCE

Geography

Advanced Subsidiary

Unit 2: Geographical Investigations

Tuesday 24 May 2011 – Afternoon

Time: 1 hour 15 minutes

Paper Reference

6GE02/01

You must have:

Resource Booklet (enclosed)

Total Marks

Instructions

- Use **black** ink or ball-point pen.
- **Fill in the boxes** at the top of this page with your name, centre number and candidate number.
- Answer ONE question in Section A and ONE question in Section B.
- Answer the questions in the spaces provided
– *there may be more space than you need.*

Information

- The total mark for this paper is 70.
- The marks for **each** question are shown in brackets
– *use this as a guide as to how much time to spend on each question.*
- The quality of your written communication will be assessed in ALL your responses
– *you should take particular care with your spelling, punctuation and grammar, as well as the clarity of expression.*

Advice

- Read each question carefully before you start to answer it.
- Keep an eye on the time.
- Spend approximately 35 – 40 minutes on Section A and 35 – 40 minutes on Section B.
- Check your answers if you have time at the end.

Turn over ►

P38855A

©2011 Edexcel Limited.

1/1/1/1



edexcel 
advancing learning, changing lives

Handwriting practice area with 25 horizontal dotted lines.



(b) Describe the fieldwork and research you undertook to investigate flood risk.

(15)

A series of horizontal dotted lines for writing the answer.



Handwriting practice area with 25 horizontal dotted lines.



(c) Using examples, explain how different strategies can be used to manage the impacts of drought.

(10)

A series of horizontal dotted lines for writing the answer.



Blank writing area with horizontal dotted lines.

(Total for Question 1 = 35 marks)



Handwriting practice area with 20 horizontal dotted lines.



(b) Describe the fieldwork and research you undertook to investigate the pressure of human activities on the coast.

(15)

A series of horizontal dotted lines for writing the answer.



Handwriting practice area with 25 horizontal dotted lines.



(c) Using examples, explain how coastal development can lead to environmental costs. (10)

A series of horizontal dotted lines for writing the answer.



Handwriting practice area with 20 horizontal dotted lines.

(Total for Question 2 = 35 marks)

TOTAL FOR SECTION A = 35 MARKS



SECTION B

Answer ONE question in this section.

Candidates should use the resources provided, their own ideas, and relevant fieldwork and research which they have carried out.

UNEQUAL SPACES

If you choose to answer Question 3, put a cross in the box .

3 Study Figure 3.

(a) Comment on the unequal provision of sport and leisure facilities in the two areas shown.

(10)

.....

.....

.....

.....

.....

.....

.....

.....

.....

.....

.....

.....

.....

.....

.....

.....

.....

.....

.....

.....

.....

.....

.....



Handwriting practice area with 20 horizontal dotted lines.



Handwriting practice area with 25 horizontal dotted lines.



(c) Using examples, explain why inequalities are difficult to manage.

(10)

A series of horizontal dotted lines for writing the answer.



Blank writing area with horizontal dotted lines.

(Total for Question 3 = 35 marks)



P 3 8 8 5 5 A 0 1 9 2 8

Candidates should use the resources provided, their own ideas, and relevant fieldwork and research which they have carried out.

REBRANDING PLACES

If you choose to answer Question 4, put a cross in the box .

4 Study Figure 4.

(a) Choose **two** strategies and comment on how they could contribute to rural rebranding.

(10)

Strategy 1 Strategy 2

Multiple horizontal dotted lines for writing.



Handwriting practice area with 20 horizontal dotted lines.



Handwriting practice area with 25 horizontal dotted lines.



(c) Using examples, explain why rebranding strategies are not always entirely successful.

(10)

A series of horizontal dotted lines for writing the answer.



(Total for Question 4 = 35 marks)

TOTAL FOR SECTION B = 35 MARKS
TOTAL FOR PAPER = 70 MARKS



BLANK PAGE



BLANK PAGE



BLANK PAGE



Edexcel GCE

Geography

Advanced Subsidiary

Unit 2: Geographical Investigations

Resource Booklet

Tuesday 24 May 2011 – Afternoon

Paper Reference

6GE02/01

Do not return this Resource Booklet with the question paper.

Turn over ►

P38855A

©2011 Edexcel Limited.

1/1/1/1



edexcel 
advancing learning, changing lives

Figure 1 Type and severity of extreme weather in Italy, 7 January 2009

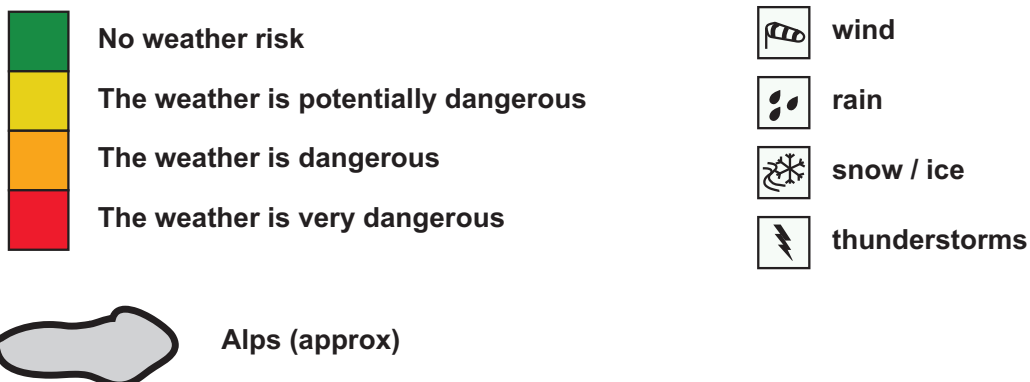
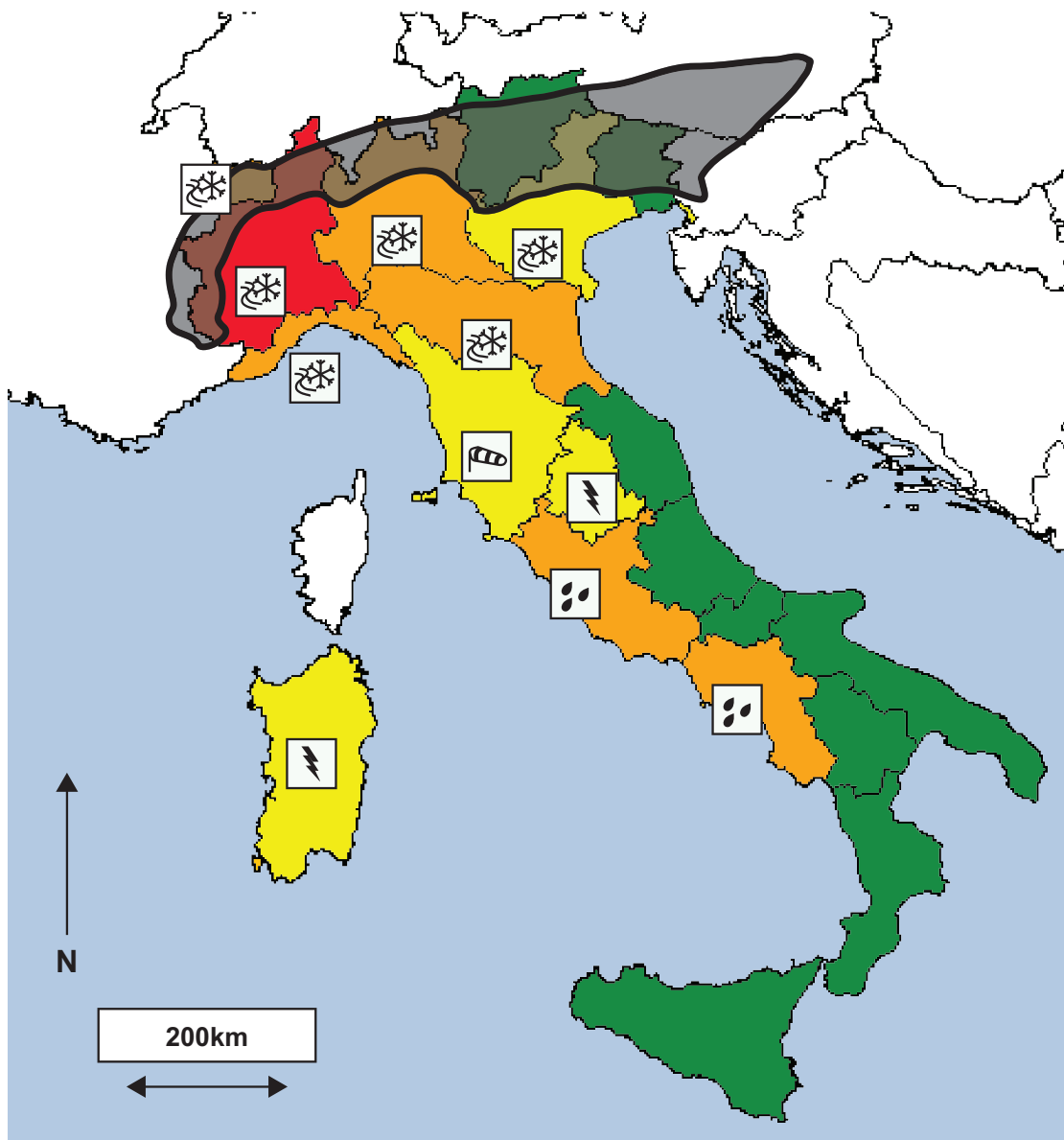


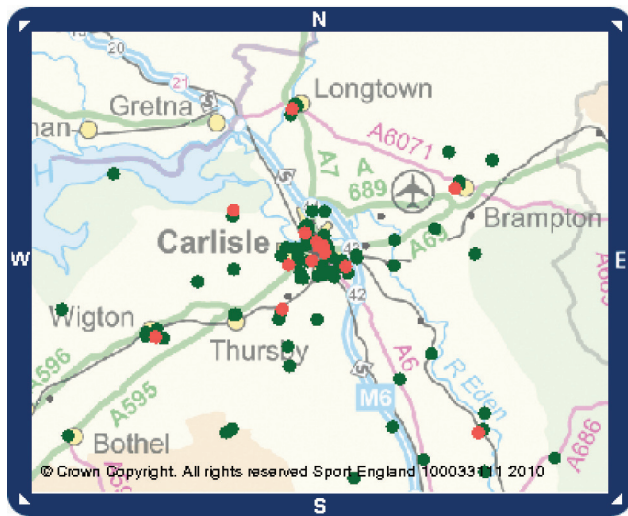
Figure 2a Milford Haven Liquid Natural Gas (LNG) Terminal, Pembrokeshire, Wales



Figure 2b Miami coastal strip, USA

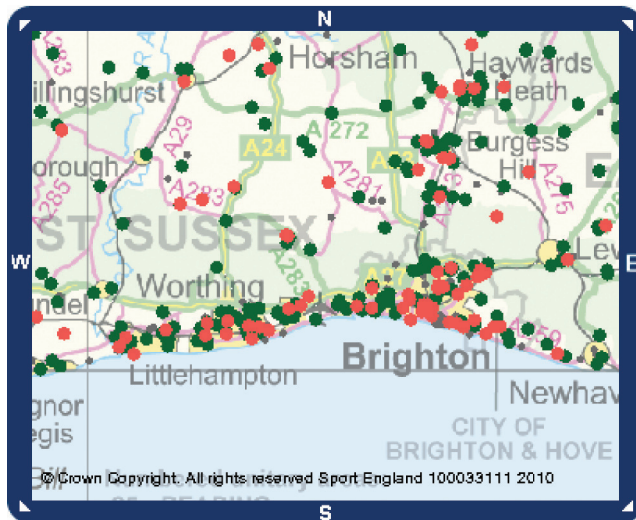


Figure 3 Two GIS (Geographical Information Systems) maps showing the distribution of grass pitches and sports halls in two areas of England



- Grass Pitches
- Sports Halls

10 km

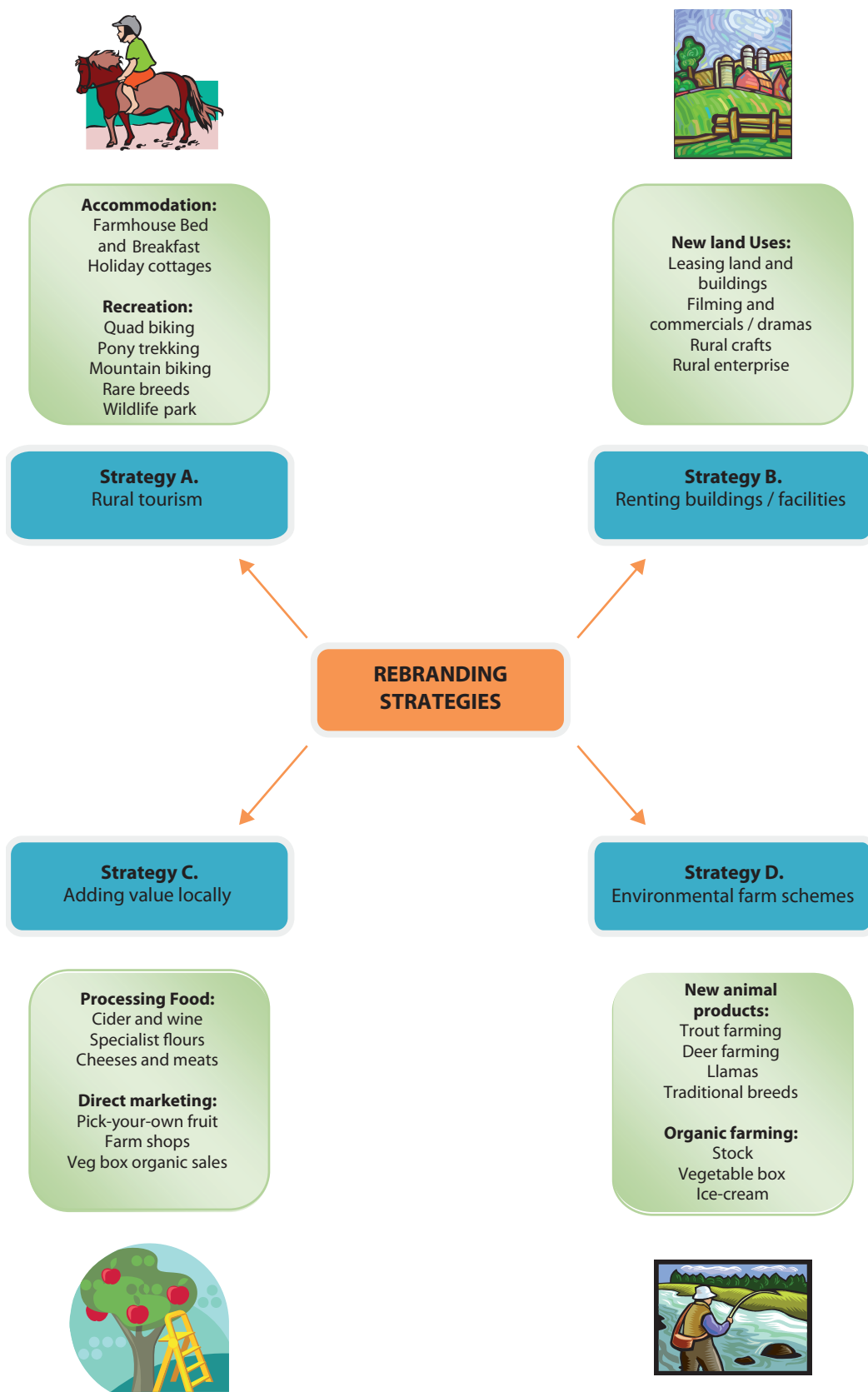


- Grass Pitches
- Sports Halls

10 km

Source: ActivePlaces <http://www.activeplaces.com/>

Figure 4 Possible rural rebranding strategies



BLANK PAGE

BLANK PAGE

BLANK PAGE